

**MOUNT COLUMBUS SCHOOL
DAKSHINPURI, NEW DELHI-62
WORKSHEET (JANUARY)
CLASS-II
SUBJECT- ENGLISH**

Read the passage and answer the following questions:

The Happy Cat

Tom has a cat named Whiskers. Whiskers is a small, white cat with a pink nose. She loves to play with her ball and run around the house. Tom takes care of Whiskers every day. He gives her food and fresh water.

Whiskers likes to sit by the window and watch the birds. Sometimes, she tries to catch them, but they fly away. At night, Whiskers sleeps on Tom's bed. Tom loves his happy cat very much.

Comprehension Questions:

1. What is Tom's cat's name?

Ans. _____.

2. What color is Whiskers?

Ans. _____.

3. What does Whiskers like to do by the window?

Ans. _____.

4. Where does Whiskers sleep at night?


Ans. _____.

5. Does Tom love his cat?

Ans. _____.

Write a composition based on the picture given with the help of words provided:

Horse , sheep , tractor , farm , fence , grains , animals



विषय-हिन्दी

* अनेक शब्दों के लिए एक शब्द लिखो -

१. देश में रहने वाला - _____
२. चित्र बनाने वाला - _____
३. मिट्टी के बर्तन बनाने वाला - _____
४. शाक सब्जी खाने वाला - _____
५. मिठाई बनाने वाला - _____
६. परिश्रम करने वाला - _____
७. मांस खाने वाला - _____
८. खेतों में काम करने वाला - _____
९. जिसके मन में दया हो - _____
१०. प्रतिदिन होने वाला - _____

SUBJECT – MATHEMATICS

MULTIPLICATION ON REPEATED ADDITION

1



$2 + 2 + 2$

$= \underline{\hspace{2cm}}$

$3 \times 2 = \underline{\hspace{2cm}}$

2

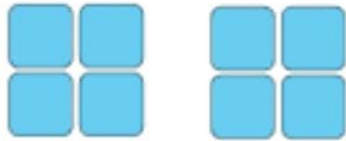


$3 + 3 + 3$

$= \underline{\hspace{2cm}}$

$3 \times 3 = \underline{\hspace{2cm}}$

3

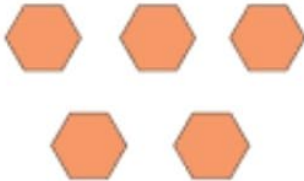


$4 + 4$

$= \underline{\hspace{2cm}}$

$2 \times 4 = \underline{\hspace{2cm}}$

4




$1 + 1 + 1 + 1 + 1$

$= \underline{\hspace{2cm}}$

$5 \times 1 = \underline{\hspace{2cm}}$

5



$6 + 6 + 6 + 6$

$= \underline{\hspace{2cm}}$

$4 \times 6 = \underline{\hspace{2cm}}$



* Match each multiplication fact with corresponding repeated addition.

7×2

5×2

3×2

10×2

11×2

6×2

8×2

0×2

9×2

10

6

14

12

0

22

20

16

18

SUBJECT – EVS

A. Mark the sentences true or false:

1. We should waste water. _____
2. Plants do not need water to grow. _____
3. We should drink clean water. _____
4. Water helps us stay healthy. _____

B. Answer the following:

1. Name two things we do with water. _____ , _____

2. Mention two ways to save water?

Ans. _____

3. How does water become dirty?

Ans. _____

4. What are the sources of water?

Ans. _____